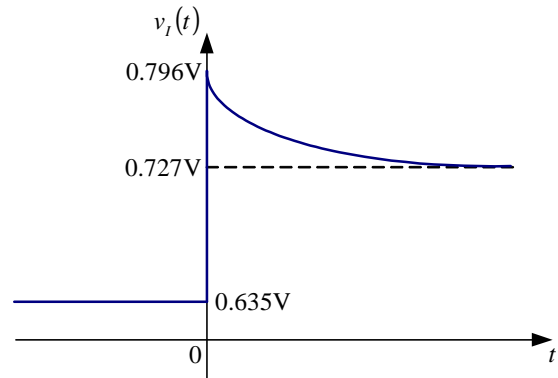


REŠENJA ZADATAKA

2.

$$v_I(t) = \begin{cases} 0.635V = const, & za\ t < 0 \\ 0.727V + 0.069 \cdot e^{-\frac{t}{118.44\mu s}}, & za\ t > 0 \end{cases}$$



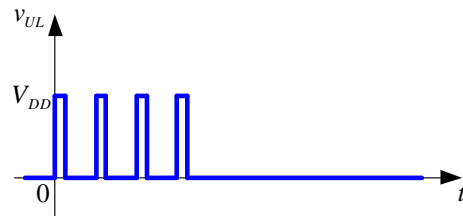
4. Za  $t < 0$  je:  $v_X = V_{DD}$ ,  $v_Y = V_{DD}$ ,  $v_Z = 0$ .

Ako se zanemari  $\Delta t$ , za  $0 < t < T_p$  je:

$$v_X = 0$$

$$v_Y(t) = V_{DD} - [V_{DD} - 0] \cdot e^{-\frac{t}{RC}} = 5V \cdot (1 - e^{-1000t})$$

$$v_Z = V_{DD}$$

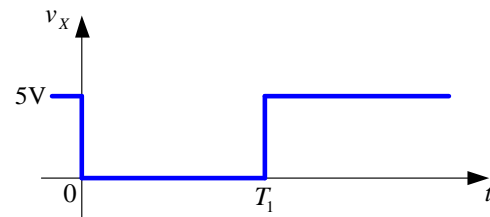


Ako se zanemari  $\Delta t$ , za  $T_p < t < 2T_p$  je:

$$v_X = 0$$

$$v_Y(t) = V_{DD} - [V_{DD} - 0] \cdot e^{-\frac{t-T_p}{RC}} = 5V \cdot (1 - e^{-1000(t-T_p)})$$

$$v_Z = V_{DD}$$

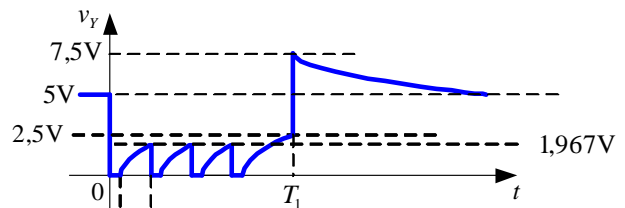


Ako se zanemari  $\Delta t$ , za  $2T_p < t < 3T_p$  je:

$$v_X = 0$$

$$v_Y(t) = V_{DD} - [V_{DD} - 0] \cdot e^{-\frac{t-2T_p}{RC}} = 5V \cdot (1 - e^{-1000(t-2T_p)})$$

$$v_Z = V_{DD}$$

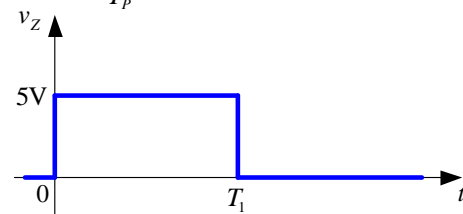


Ako se zanemari  $\Delta t$ , za  $3T_p < t < T_1$  je:

$$v_X = 0$$

$$v_Y(t) = V_{DD} - [V_{DD} - 0] \cdot e^{-\frac{t-3T_p}{RC}} = 5V \cdot (1 - e^{-1000(t-3T_p)})$$

$$v_Z = V_{DD}$$



Ako se zanemari  $\Delta t$ , za  $t > T_1$  je:

$$v_X = V_{DD}$$

$$v_Y(t) = V_{DD} - [V_{DD} - \frac{3V_{DD}}{2}] \cdot e^{-\frac{t-T_1}{RC}} = 5V + 2.5V \cdot e^{-1000(t-T_1)}$$

$$v_Z = 0$$

$$T_1 = 3T_p + 0,001 \ln 2 = 2,193ms$$

6. a) Prekidač je zatvoren za  $Q_i = 0$ , a otvoren za  $Q_i = 1$ .

b)  $R_s = 1,15\text{k}\Omega$        $R_0 = 75\text{k}\Omega$      $R_1 = 35\text{k}\Omega$      $R_2 = 15\text{k}\Omega$      $R_3 = 5\text{k}\Omega$

c)  $R_{bo} = 1,67\text{k}\Omega$        $V_{MAX} = 4,375\text{V}$        $V_{MIN} = -5\text{V}$